

Index:

BA PROVINCIAL FREE-BIRD INSTITUTE

ANNUAL EXAMINATION 2020

YEAR 12

GEOGRAPHY

ANSWER BOOKLET

**HAND IN THIS ANSWER BOOKLET TO THE SUPERVISOR
BEFORE YOU LEAVE THE EXAMINATION ROOM.**

**MARKS
GAINED:**

QUESTION 1

**NATURAL HAZARD – FIJI
AND MONSOON ASIA**

(32 marks)

A. Mapping

(i) _____

(1/2 mark)

(ii) _____

(1/2 mark)

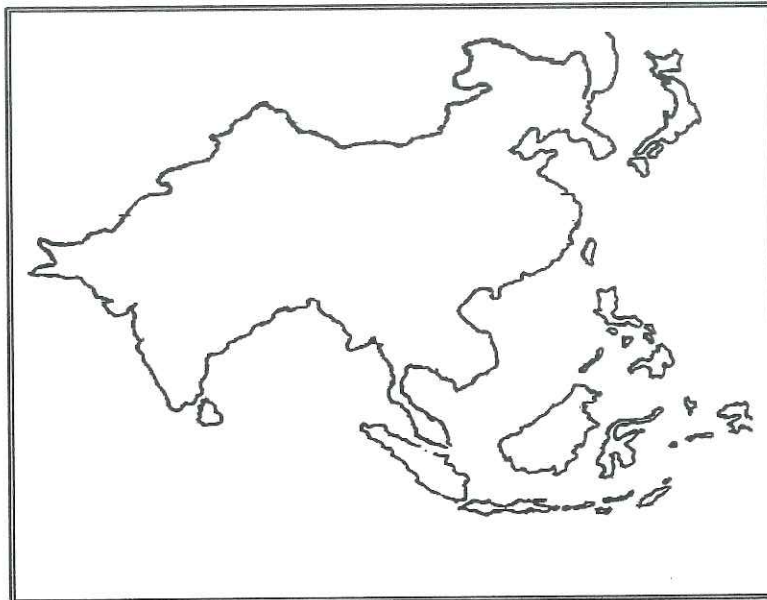
(iii) _____

(1/2 mark)

(iv) _____

(1/2 mark)

b.



(2marks)

B Resource Interpretation

(2marks)

C. Synoptic Chart Interpretation

(i) _____

_____ (2marks)

(ii) _____

_____ (2marks)

(iii) _____

_____ (2marks)

D. Short Answer Questions

(i) _____

_____ (2marks)

(ii) _____

_____ (2marks)

E. Definition (Indicate the numbers that you have chosen in the spaces provided)

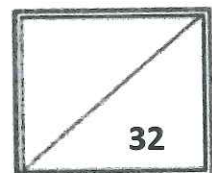
() _____
_____ (1mark)

() _____
_____ (1 mark)

() _____
_____ (1mark)

Lined writing area consisting of 20 horizontal lines.

Relevancy	Example	Logic	Intro.	Conclusion	Total
4	2	2	1	1	10



SECTION B

[68 marks]

Question 2 Agriculture and Food Production- Fiji and New Zealand

[16marks]

A. Mapping

a.

- (i) _____ (1/2mark)
- (ii) _____ (1/2mark)
- (iii) _____ (1/2mark)
- (iv) _____ (1/2mark)

b.



(2marks)

B. Resource Interpretation

(2marks)

C. Short Answer Questions

(i) _____

_____ (2marks)

(ii) _____

_____ (2marks)

D. Definition (Indicate the numbers that you have chosen in the spaces provided)

() _____
_____ (1mark)

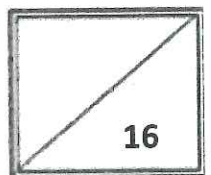
() _____
_____ (1mark)

() _____
_____ (1 mark)

() _____
_____ (1mark)

() _____
_____ (1mark)

() _____
_____ (1mark)



Question 3

Tourism- Fiji and Australia

[16marks]

A. Mapping

a.

- (i) _____ (1/2mark)
- (ii) _____ (1/2mark)
- (iii) _____ (1/2mark)
- (iv) _____ (1/2mark)

b.



B. Resource Interpretation

(2marks)

C. Short Answer Questions

(i) _____

_____ (2marks)

(ii) _____

_____ (2marks)

D. Definition (Indicate the numbers that you have chosen in the spaces provided)

() _____ (1mark)

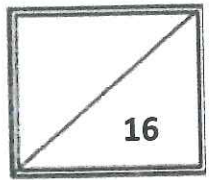
() _____ (1mark)

() _____ (1 mark)

() _____ (1mark)

() _____ (1mark)

() _____ (1mark)



Question 4

Marine Resources- Fiji and Japan

[16marks]

A. Mapping

a.

- (i) _____ (1/2mark)
- (ii) _____ (1/2mark)
- (iii) _____ (1/2mark)
- (iv) _____ (1/2mark)

b.



(2marks)

B. Resource Interpretation

(2marks)

C. Short Answer Questions

(i) _____

_____ (2marks)

(ii) _____

_____ (2marks)

D. Definition (Indicate the numbers that you have chosen in the spaces provided)

() _____ (1mark)

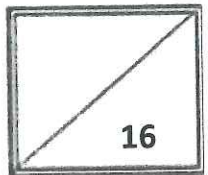
() _____ (1mark)

() _____ (1 mark)

() _____ (1mark)

() _____ (1mark)

() _____ (1mark)



SECTION B (continued)

E. Essay

() (Indicate the number of the question that you have chosen in the space provided)

A series of 20 horizontal lines for writing an essay.

Relevancy	Example	Logic	Intro.	Conclusion	Total
4	2	2	1	1	10

