

NAME: _____

LEVEL: _____

S/ID: _____


RATU NAVULA COLLEGE
TERM TWO END EXAMINATION - 2020
GEOGRAPHY - YEAR 12

ANSWER BOOK

HAND IN THIS ANSWER BOOK TO THE SUPERVISOR BEFORE YOU LEAVE THE
EXAMINATION ROOM

INSTRUCTION

1. Write **all** your answer in this **Answer Book**
2. Write your answer to each question in the appropriate places of this **Answer Book**.
3. Answer **all** the question with a blue or a black ballpoint or ink pen. Do **not** use red ink. Use a pencil only for diagram.
4. If you use extra sheet of paper, be sure to write clearly the question number being answered and to attach each sheet securely in this answer book in the appropriate place.
5. There are **two** Sections in this paper. **Both** are compulsory. Note the choices in the essay section in Section B.



SECTION A (30 MARKS)

All Questions in this Section are Compulsory

QUESTION 1 Natural Hazards – Fiji and Monsoon Asia (28 marks)

A. Mapping (2marks)

- (a)
 - i. _____ (1/2mark)
 - ii. _____ (1/2mark)
 - iii. _____ (1/2mark)
 - iv. _____ (1/2mark)



B. Synoptic Chart Interpretation

(2marks)

(i). _____

(1mark)

(ii). _____

(1mark)

C. Resource Interpretation

(2marks)

(i). _____

(½mark)

(ii). _____

(½marks)

(iii). _____

(1mark)

D. Definitions

(i). _____

(1mark)

(ii). _____

(1mark)

(i). _____

(1mark)

(ii). _____

(1marks)

G. Short Answer Question (6marks)

(i). _____

(2marks)

(ii). _____

(2marks)

(iii). _____

(2marks)

H. ESSAY (10mark)

SECTION B

(72 Marks)

There are three questions in this section. All the questions in this section are compulsory, except for the choice in the essay. Students will choose two essays from the three questions given in this section.

QUESTION 2

Tourism – Fiji and Australia

[28marks]

A. Mapping

a.

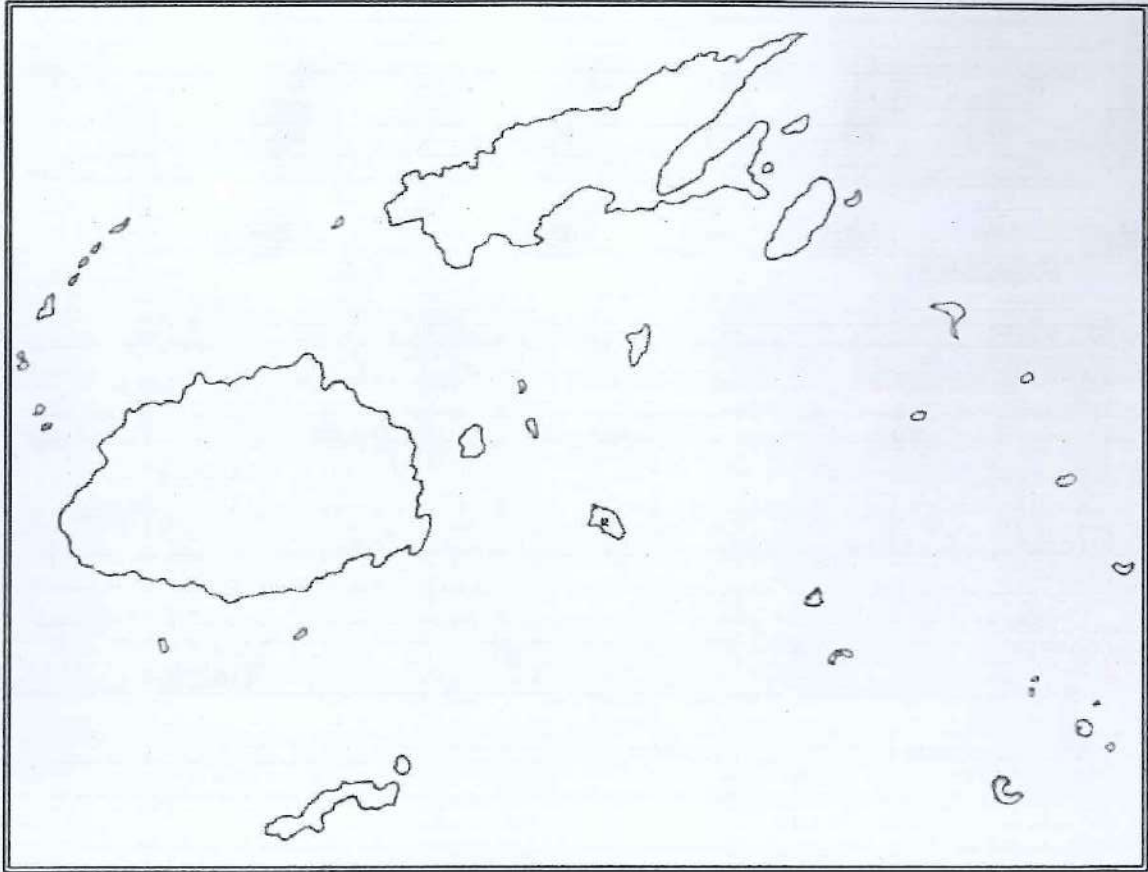
i. _____ (1/2mark)

ii. _____ (1/2mark)

iii. _____ (1/2mark)

iv. _____ (1/2mark)

(b)



B. Chart Interpretation

(2marks)

(i). _____

(1mark)

(ii). _____

(1mark)

C. Graph Interpretation

(2marks)

- (ii). _____

D. Definitions

- (i). _____

(1mark)

- (ii). _____

(1mark)

- (iii). _____

(1mark)

- (iv) _____

(1marks)

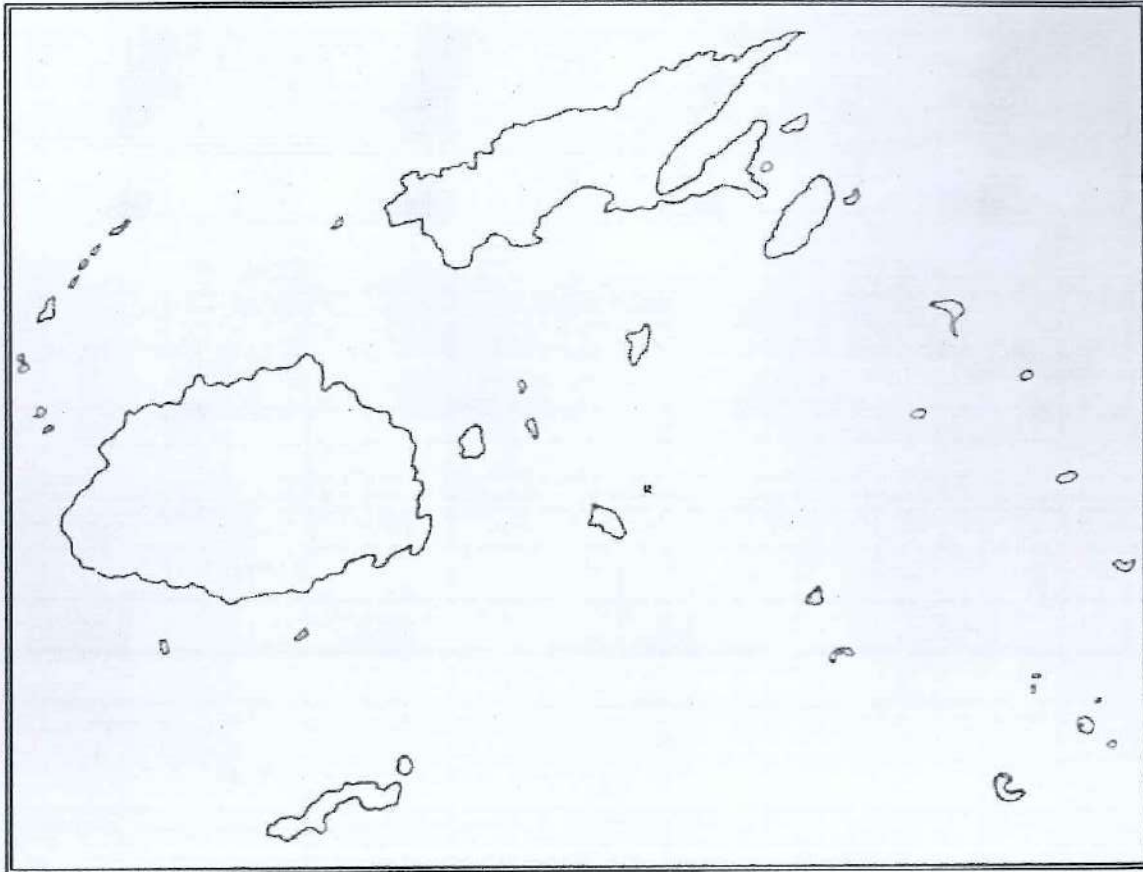
E. Short Answer Question

(6marks)

- (i). _____

(2marks)

(b)



B. Photograph Interpretation

(2marks)

(i). _____

(1mark)

(ii). _____

(1mark)

C. Resource Interpretation (2marks)

(i). _____

(1mark)

(ii). _____

(1marks)

D. Definitions (4marks)

(i). _____

(1mark)

(ii). _____

(1mark)

(iii). _____

(1mark)

(iv). _____

(1marks)

E. Short Answer Question (6marks)

(i). _____

(2marks)

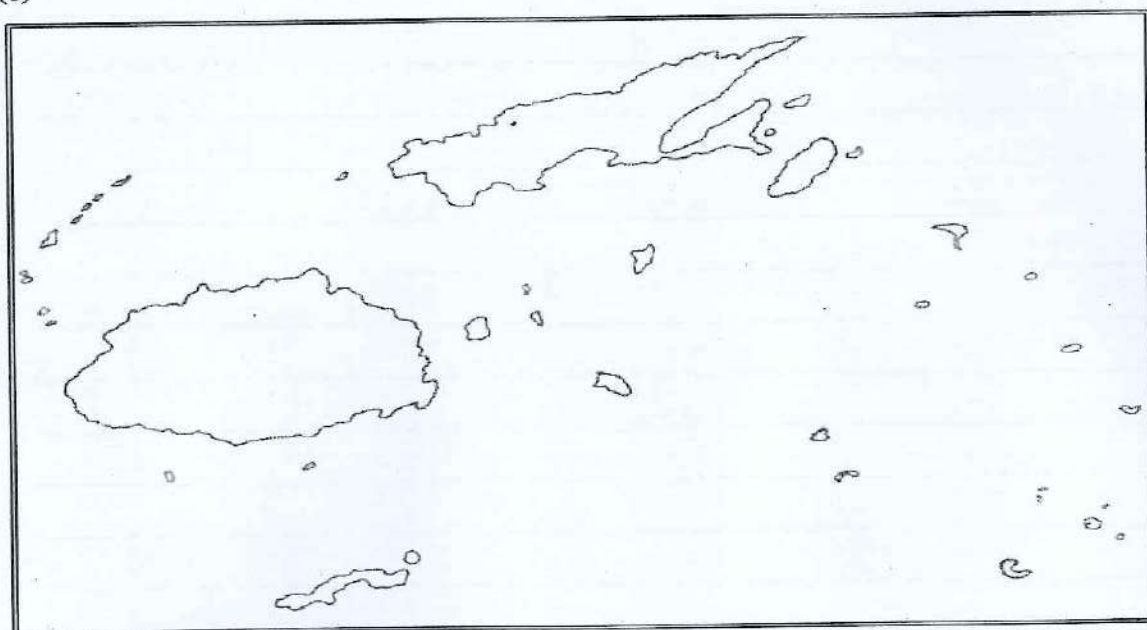
QUESTION 4 **MARINE RESOURCES FIJI AND JAPAN** (26mark)

A. Mapping

a)

- i) _____ (1/2mark)
- ii) _____ (1/2mark)
- iii) _____ (1/2mark)
- iv) _____ (1/2mark)

(b)



B. Resource Interpretation

(2 marks)

(i). _____

(1 mark)

(ii). _____

(1 mark)

C. Definitions

(4marks)

(i). _____

(1mark)

(ii). _____

(1mark)

(iii). _____

(1mark)

(iv). _____

(1marks)

D. Short Answer Question

(6marks)

(i). _____

Blank lined writing area with 12 horizontal lines.